


Day 8



$54 - 16 =$

What is the time now?

$6 \times 4 =$

$565\text{p} = \text{£}$

What is the place value of 8 in 9877

$100 + 6 =$

74 minutes = hours minutes

Which is heavier 90g or 8kg?

$60 + 20 + 6 =$


$9 + 4 + 3 + 3 =$

Write the number three hundred and fifty six.

$\text{£}7.50 - \text{£}3.50 =$

1, 3, 5, 7 what is the next number in the sequence?

What shape is this ?



On a digital clock the time is 16:10 this is

Minutes past

1 day = hours


What is Double 15

$12 \div 4 =$

What is halve of 600?

$9 \times 3 =$

Day 8



Answers

54 - 16 =

38

What is the time now?

6 x 4 =

24

565p = £

£5.65

What is the place value of 8 in 9877

800

100 + 6 =

106

74 minutes = hours minutes

1 hour and 14 minutes

Which is heavier 90g or 8kg?

8kg

60+20+6 =

86

9+4+3+3 =

19

Write the number three hundred and fifty six.

356


£7.50 - £3.50 =

£4.00

1,3,5,7 what is the next number in the sequence?

9

What shape is this ?



hexagon

On a digital clock the time is 16:10 this is

Minutes past

10 minutes past 4

1 day = hours

24 hours

What is Double 15

30

12 ÷ 4 =

3

What is halve of 600?

300

9x3 =

27