


# Day 9



$$64 - 12 =$$

What is the time now?

$$8 \times 4 =$$

$$102\text{p} = \text{£}$$

What is the place value of 4 in 4765

$$500 + 10 =$$

$$87 \text{ minutes} = \boxed{\phantom{00}} \text{ hours } \boxed{\phantom{00}} \text{ minutes}$$

Which is heavier 70g or 8mg?

$$40 + 10 + 2 =$$

$$7 + 7 + 7 + =$$

Write the number five hundred.

$$\text{£}8.20 - \text{£}0.50 =$$

20, 24, 28, what is the next number in the sequence?

What shape is this ?



On a digital clock the time is 18:05 this is

$$\boxed{\phantom{00}} \text{ Minutes past } \boxed{\phantom{00}}$$

$$2 \text{ days} = \boxed{\phantom{00}} \text{ hours}$$


What is Double 65

$$30 \div 5 =$$

What is halve of 1000?

$$9 \times 3 =$$

# Day 9



# Answers

$64 - 12 =$

52

What is the time now?

$8 \times 4 =$

32

$102p = \text{£}$

£1.02

What is the place value of 4 in 4765

4000

$500 + 10 =$

510

87 minutes =  hours  minutes

1 hour 27  
minutes

Which is heavier 70g or 8mg?

70g

$40 + 10 + 2 =$

52

$7 + 7 + 7 =$

21

Write the number five hundred.

500


$\text{£}8.20 - \text{£}0.50 =$

£7.70

20, 24, 28, what is the next number in the sequence?

32

What shape is this ?



Parallelogram

On a digital clock the time is 18:05 this is

5 minutes past

Minutes past

6

2 days =  hours

48 hours

What is Double 65

130

$30 \div 5 =$

6

What is halve of 1000?

500

$9 \times 3 =$

27