


Day 1



$20 - 7 =$

What is the time now?

$6 \times 3 =$

$186p = \text{£}$

What is the place value of 5 in 358

$19 + 8 =$

90 minutes = hours minutes

Which is heavier 800g or 2kg?

$600 + 40 + 4 =$


$4 + 4 + 4 + 4 =$

Write the number two hundred and thirty six.

$\text{£}7.00 - \text{£}2.50 =$

3, 6, 9, 12 what is the next number in the sequence?

What shape is this ?



On a digital clock the time is 12:25 this is

Minutes past

Jody walks 2 miles every day for 6 days how many miles does she walk altogether?

Logan puts 20 sweets in a party bag and makes 5 party bags. How many sweets will he need?

$24 \div 4 =$

A bag of potatoes is £1.30. How much will three bags cost?

$3 \times 5 =$

Day 1



Answers

$20 - 7 =$

13

What is the time now?

$6 \times 3 =$

18

$186p = \text{£}$

£1.86

What is the place value of 5 in 358

50

$19 + 8 =$

27

90 minutes = hours minutes

1 hour 30 minutes

Which is heavier 800g or 2kg?

2kg

$600 + 40 + 4 =$

644

$4 + 4 + 4 + 4 =$

16

Write the number two hundred and thirty six.

236

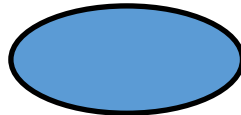
$\text{£}7.00 - \text{£}2.50 =$

£4.50

3, 6, 9, 12 what is the next number in the sequence?

15

What shape is this ?



oval

On a digital clock the time is 12:25 this is

Minutes past

25 minutes past 12

Jody walks 2 miles every day for 6 days how many miles does she walk altogether?

12 miles

Logan wants to put 20 sweets in party bags, he has 5 party bags. How many sweets will he need?

100

$24 \div 4 =$

6

A bag of potatoes is £1.30. How much will three bags cost?

£3.90

$3 \times 5 =$

15