


Day 7



$32 - 9 =$

What is the time now?

$6 \times 6 =$

$702\text{p} = \text{£}$

What is the place value of 4 in 4220

$18 + 9 =$

175 minutes = hours minutes

Which is heavier 90g or 80mg?

$900 + 90 + 2 =$


$9 + 4 + 3 + 1 =$

Write the number three thousand and two.

$\text{£}11.00 - \text{£}3.50 =$

120,220,320,420 what is the next number in the sequence?

What shape is this ?



On a digital clock the time is 014:30 this is

Minutes to

4 hours = minutes

What is Double 66

$50 \div 10 =$

What is halve of 86?

$3 \times 9 =$

Day 7



Answers

$32 - 9 =$

23

What is the time now?

$6 \times 6 =$

36

$702p = \text{£}$

£7.02

What is the place value of 4 in 4220

4000

$18 + 9 =$

27

175 minutes = hours minutes

1 hour and 55

Which is heavier 90g or 80mg?

90g

$900 + 90 + 2 =$

990

$9 + 4 + 3 + 1 =$

17

Write the number three thousand and two.

3002


$\text{£}11.00 - \text{£}3.50 =$

£7.50

120,220,320,420 what is the next number in the sequence?

520

What shape is this ?



pentagon

On a digital clock the time is 014:30 this is

Minutes past

30 minutes

past 2

4 hours = minutes

240

What is Double 66

132

$50 \div 10 =$

5

What is halve of 86?

43

$3 \times 9 =$

27